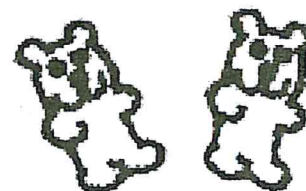


Name _____



Observing Osmosis

Background Information: Molecules are in constant motion, and tend to move from areas of higher concentrations to lesser concentrations.

Diffusion is defined as the movement of molecules from an area of high concentration to an area of low concentration.

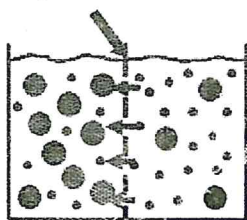
The diffusion of water molecules through a selectively permeable membrane is known as OSMOSIS.

Selectively permeable means that some molecules can move through the membrane while others cannot.

Movement through membranes is called transport.

Diffusion and osmosis are passive forms of transport; this means that do not need energy to move areas of high concentration to areas of low concentration. Active transport requires energy to transport molecules from low concentration to high concentration.

Selectively Permeable Membrane



Osmosis is the movement (transport) of water (small dots) through a selectively permeable membrane from an area of high concentration to an area of low concentration.

Gummy Bears are popular candies made of gelatin, starch, and sugar.

Name: _____ Hour _____

Problem: *How will soaking Gummy Bear candies in water affect the size of the candy?*

Conclusion:

Claim (Educated response to the question) -

R

A

Evidence (2-3 pieces of data or information that supports the claim) -

C

Reasoning (Restate the "Claim" with a nibble of your "Evidence" and a general scientific statement to back it up)

R

A

C

E

Data:

Before soaking in water	After soaking in water
Height	Height
Width	Width
Mass	Mass
Descriptive observations	Descriptive observations

Calculate the percent change in the size of the candy:

% CHANGE IN HEIGHT =

(After soaking height - Before soaking height / Before soaking height) \times 100

(_____ - _____ / _____) \times 100 = _____%

% CHANGE IN WIDTH =

(After soaking width - Before soaking width / Before soaking width) \times 100

(_____ - _____ / _____) \times 100 = _____%

% CHANGE IN MASS =

(After soaking mass - Before soaking mass / Before soaking mass) \times 100

(_____ - _____ / _____) \times 100 = _____%

Graph the percent changes on a bar graph. Remember to title and label both axes.

Question: How will soaking Gummy Bear candies in distilled water affect the size of the candy?

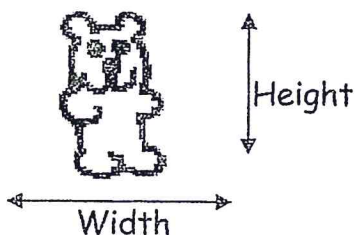
Prediction (explain your prediction based on the background information):

Materials:

Beaker	Distilled water	Gummy bear
Ruler	Masking tape	Triple Beam Balance
Wax paper	Paper towel	Calculator

Procedure:

1. Use the masking tape to label your beaker with your names & class period.
2. Use the ruler to find the height & width of your candy bear.



3. Use a triple beam balance to find the mass of your candy bear.
 - a. Use a piece of wax paper to protect the pan of the balance.
 - b. Remember to subtract the mass of the wax paper.
4. Record descriptive observations about the candy bear.
5. Fill your beaker $\frac{1}{2}$ way full with distilled water.
6. Put your candy bear in the water.
7. Set the beaker aside for one day.
8. After the candy bear has been in the distilled water overnight, gently take it out of the water and pat it dry. Be very careful because the candy is now extremely breakable.
9. Repeat steps 2 - 4.